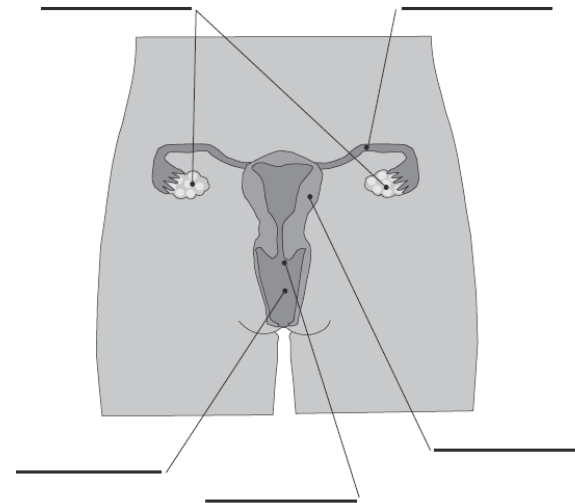
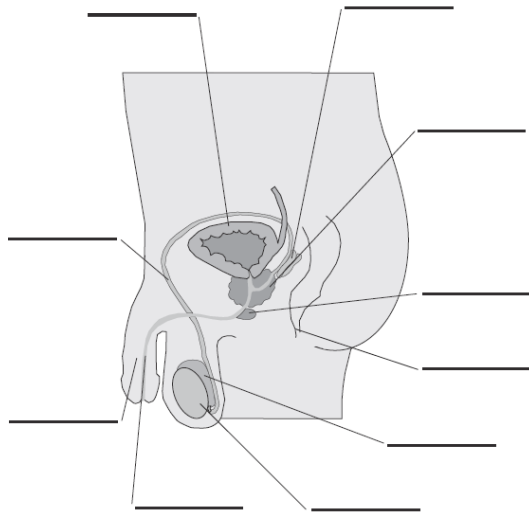


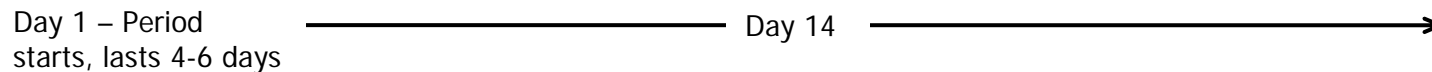
Unit/Topic of work: 7B Reproduction

Label these diagrams which show the male and female reproductive organs.



Pick three parts that you have labelled from **both** diagrams and explain what they do.

Complete this timeline to show the main stages of the menstrual cycle. Some information has been included for you to get you started.



Try to find out about problems that can happen during pregnancy.
Describe one **in your own words**

Assessment criteria:

- Level 4: Label diagrams of the male and female reproductive organs
- Level 5: Describe the functions of parts of the male and female reproductive organs
- Level 6: Describe the stages of the menstrual cycle
- Level 7: Carry out research to investigate health problems which can affect pregnancy

(Tick the targets achieved and highlight the next step target)